

Zahl und Variable

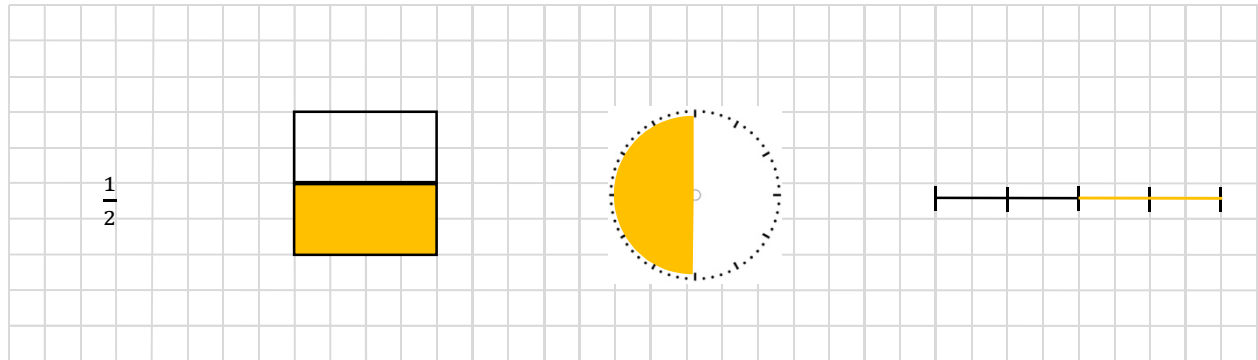
Arbeitsblätter



1/2

Übung 12

1. Zeichne jeden Bruch in drei verschiedenen Varianten dar.



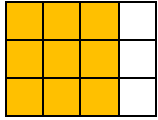
Zahl und Variable

Arbeitsblätter



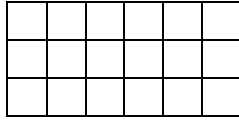
2/2

2. Zeichne den Bruch ein und rechne die Anzahl aus.



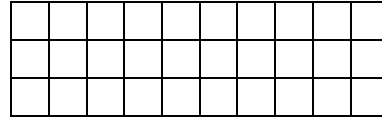
$\frac{3}{4}$ von 12

= 9



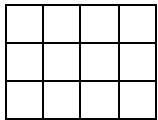
$\frac{5}{6}$ von 18

= _____




$\frac{2}{3}$ von 30

= _____




$\frac{7}{12}$ von 12

= _____



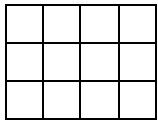
$\frac{1}{8}$ von 24

= _____



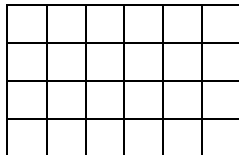
$\frac{3}{4}$ von 36

= _____




$\frac{7}{12}$ von 12

= _____




$\frac{5}{6}$ von 24

= _____




$\frac{7}{9}$ von 36

= _____



$\frac{3}{5}$ von 100

= _____



$\frac{1}{20}$ von 100

= _____