

Zahl und Variable

Arbeitsblätter

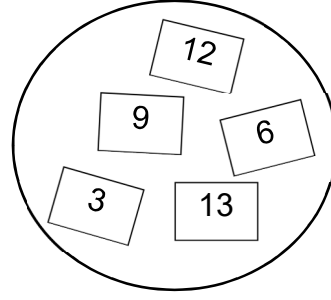
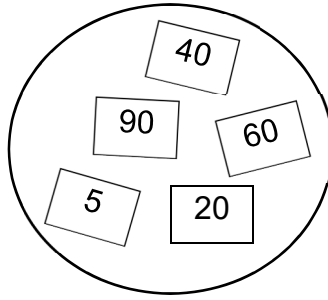
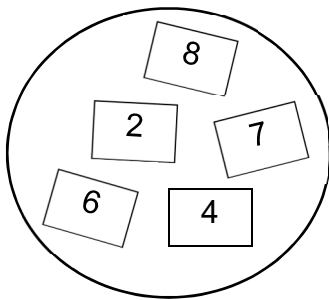


1/2

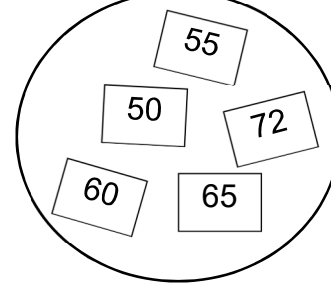
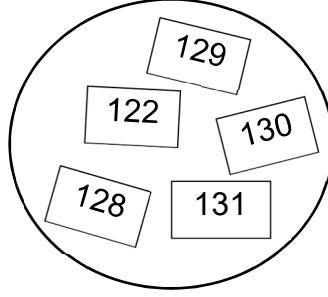
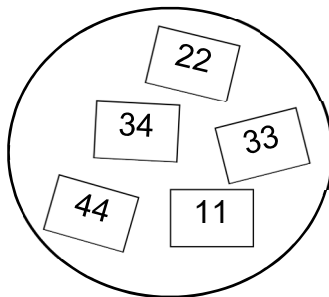
Übung 3

Weitere Rätsel dem Pausenplatz

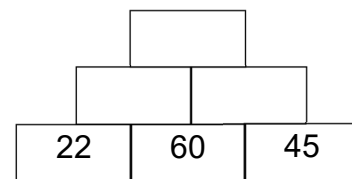
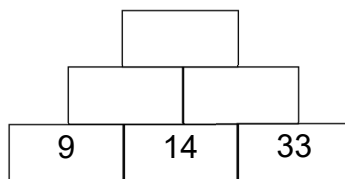
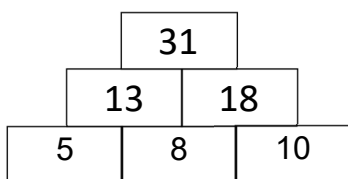
1. Immer eine Zahl passt nicht in die Gruppe. Streiche sie durch und gib einen Grund an, warum sie nicht passt.



Die 7 ist nicht in der Zweierreihe.



2. Zahlenmauern: Schreibe die fehlende Zahl auf die leeren Steine.

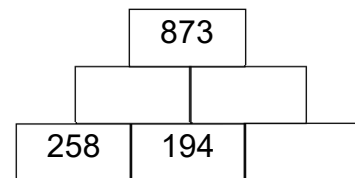
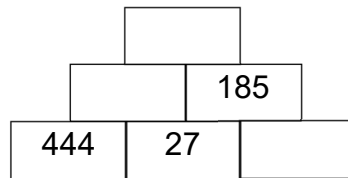
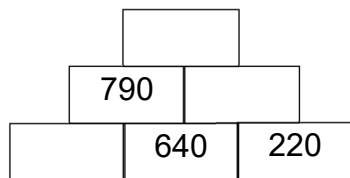
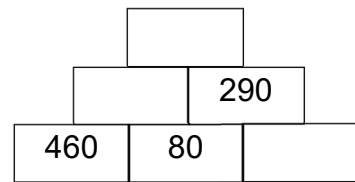
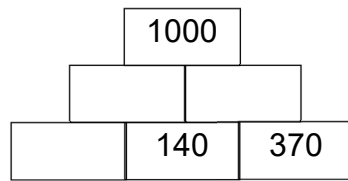
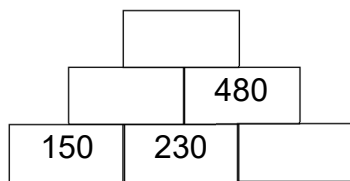
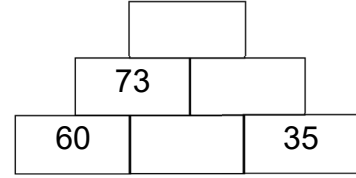
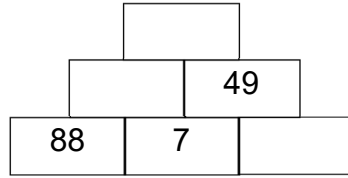
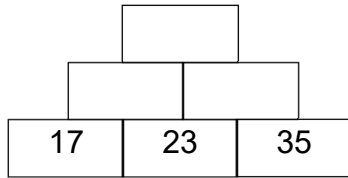


Zahl und Variable

Arbeitsblätter



2/2



3. Addiere und subtrahiere.

$60 + 25 = \underline{\quad}$

$150 - 10 = \underline{\quad}$

$44 + 32 = \underline{\quad}$

$48 + 30 = \underline{\quad}$

$100 - 35 = \underline{\quad}$

$50 - 20 = \underline{\quad}$

$77 + 33 = \underline{\quad}$

$60 + 22 = \underline{\quad}$

$250 - 32 = \underline{\quad}$

$40 + \underline{\quad} = 100$

$75 + \underline{\quad} = 100$

$80 + \underline{\quad} = 100$

$67 + \underline{\quad} = 100$

$93 + \underline{\quad} = 100$

$51 + \underline{\quad} = 100$

$145 - \underline{\quad} = 100$

$276 - \underline{\quad} = 100$

$638 - \underline{\quad} = 100$

$500 + \underline{\quad} = 1000$

$800 + \underline{\quad} = 1000$

$300 + \underline{\quad} = 1000$

$1400 - \underline{\quad} = 1000$

$2000 - \underline{\quad} = 1000$

$1300 - \underline{\quad} = 1000$

$450 + \underline{\quad} = 1000$

$750 + \underline{\quad} = 1000$

$350 + \underline{\quad} = 1000$

$200 + 60 + 2 = \underline{\quad}$

$600 + 90 + 4 = \underline{\quad}$

$700 - 10 - 4 = \underline{\quad}$

$500 + 50 + 3 = \underline{\quad}$

$10 + 500 + 2 = \underline{\quad}$

$400 - 5 - 30 = \underline{\quad}$

$70 + 300 + 3 = \underline{\quad}$

$7 + 30 + 800 = \underline{\quad}$

$1000 - 50 - 2 = \underline{\quad}$